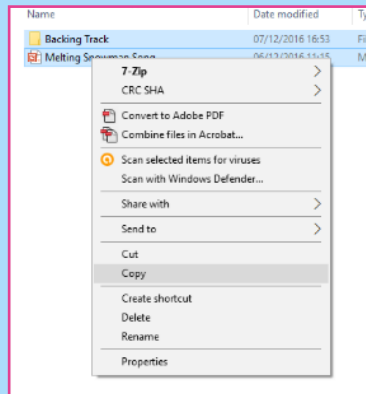
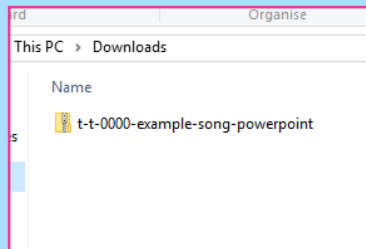


Guidance for Video/Audio in PowerPoints

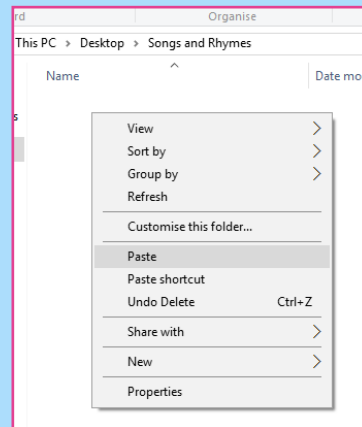
1

Open the downloaded folder and copy all the files.



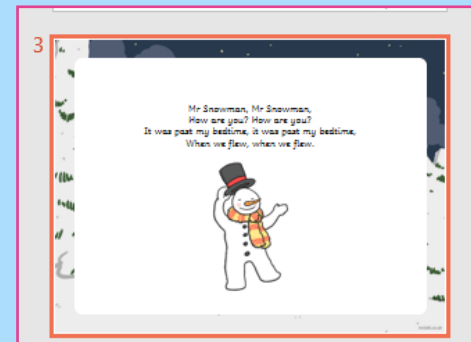
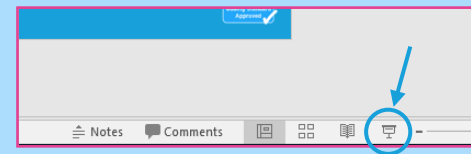
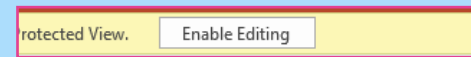
2

Paste the copied files into a new folder.



3

To use the PowerPoint, enable editing and put into slide show mode.



Please note the embedded audio may not be compatible with earlier versions of PowerPoint.

You may wish to delete this slide before beginning the presentation.



REGENT STUDIES

Focused education on life's walk

www.regentstudies.com



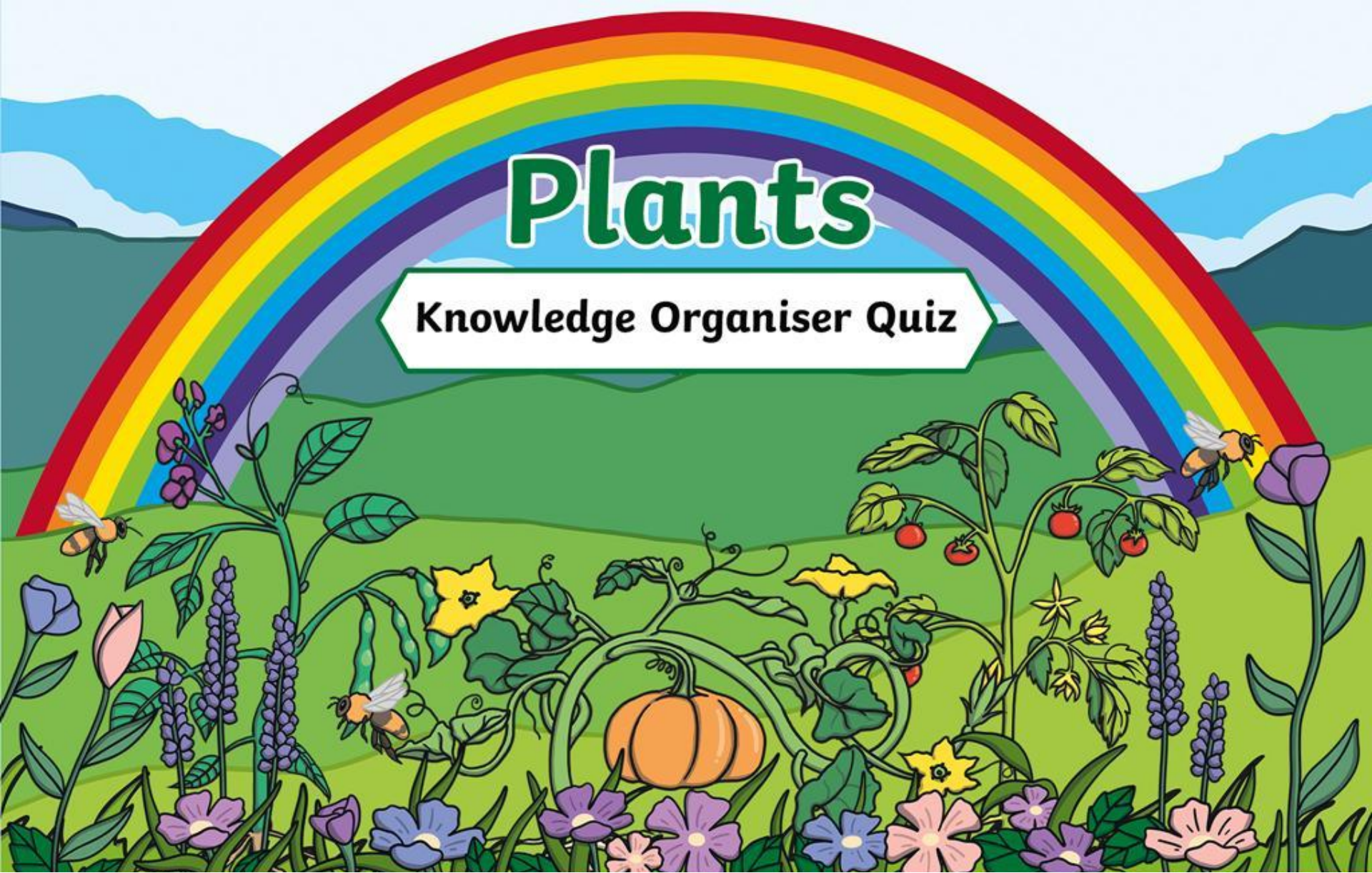
Science

Plants



Plants

Knowledge Organiser Quiz



REGENT STUDIES

Focused education on life's walk

www.regentstudies.com

How to Play

Read each question and select the correct answer.

Plants		Year 2	
Key Vocabulary		Key Knowledge	
germination	When the conditions are right, the seed soaks up water and swells, and the tiny new plant bursts out of its shell. This is called germination .		
sprout	When a plant sprouts , it grows new shoots .		
shoot	A shoot grows upwards from the seed or plant to find sunlight .		
seed dispersal	Seed dispersal is when the seeds move away from the parent plant. They can be moved by the wind or animals.		

1

Which of these things do ALL plants need to grow well?

A a plant pot



B flowers



C the right temperature



1

2

3

4

5

6

7

8

9

10

11

12

13

14

15

16

17

18

19

20

21

22

Next



REGENT STUDIES

Focused education on life's walk

www.regentstudies.com

2

Which of these things could plants do without and still grow well?

A water



B someone to care for it



C sunlight



1

2

3

4

5

6

7

8

9

10

11

12

13

14

15

16

17

18

19

20

21

22


Next



3

What do plants need to make their own food?

A the sun



B the wind



C rainbows



1

2

3

4

5

6

7

8

9

10

11

12

13

14

15

16

17

18

19

20

21

22

Next



REGENT STUDIES

Focused education on life's walk

www.regentstudies.com

4

What is germination?

A when a seed begins to grow and a tiny new plant bursts out of its shell



B when the fruit is ready to be picked



C when the plant begins to die



1

2

3

4

5

6

7

8

9

10

11

12

13

14

15

16

17

18

19

20

21

22

Next



5

Which of these things do ALL plants need to grow well?

A an insect



B water



C a quiet place



1

2

3

4

5

6

7

8

9

10

11

12

13

14

15

16

17

18

19

20

21

22

Next



6

Which way does a shoot grow from the seed?

A sideways



B downwards



C upwards



1

2

3

4

5

6

7

8

9

10

11

12

13

14

15

16

17

18

19

20

21

22

Next



REGENT STUDIES

Focused education on life's walk

www.regentstudies.com

7

Which of these plants grow from a bulb?

A daffodils



B cress



C sunflower



1

2

3

4

5

6

7

8

9

10

11

12

13

14

15

16

17

18

19

20

21

22

Next



REGENT STUDIES

Focused education on life's walk

www.regentstudies.com

8

What happens to many plants after its seeds have dispersed?

A it flowers



B it dies



C it germinates



1

2

3

4

5

6

7

8

9

10

11

12

13

14

15

16

17

18

19

20

21

22

Next



REGENT STUDIES

Focused education on life's walk

www.regentstudies.com

9

Which part of the plant is used to take in light from the sun?

A leaves



B seeds



C petals



1

2

3

4

5

6

7

8

9

10

11

12

13

14

15

16

17

18

19

20

21

22

Next



REGENT STUDIES

Focused education on life's walk

www.regentstudies.com

10

In the life cycle of a plant, which part of the plant grows before leaves appear?

A the fruit



B the flower



C the roots



1

2

3

4

5

6

7

8

9

10

11

12

13

14

15

16

17

18

19

20

21

22

Next



REGENT STUDIES

Focused education on life's walk

www.regentstudies.com

11

In the life cycle of a plant, what happens after the plant flowers?

A the fruit grows



B the roots grow



C the seed germinates



1

2

3

4

5

6

7

8

9

10

11

12

13

14

15

16

17

18

19

20

21

22

Next



REGENT STUDIES

Focused education on life's walk

www.regentstudies.com

12

What happens when a plant sprouts?

A it dies



B it grows new shoots



C it germinates



1

2

3

4

5

6

7

8

9

10

11

12

13

14

15

16

17

18

19

20

21

22

Next



REGENT STUDIES

Focused education on life's walk

www.regentstudies.com

13

Which one of these is NOT a way that a seed can be moved from its parent plant?

A by the wind



B by animals



C by getting up and walking



1

2

3

4

5

6

7

8

9

10

11

12

13

14

15

16

17

18

19

20

21

22

Next



REGENT STUDIES

Focused education on life's walk

www.regentstudies.com

14

What temperature do these plants like best?

A cold



B warm



C hot



- 1
- 2
- 3
- 4
- 5
- 6
- 7
- 8
- 9
- 10
- 11
- 12
- 13
- 14
- 15
- 16
- 17
- 18
- 19
- 20
- 21
- 22

Next



15

What temperature do these plants like best?

A cold



B warm



C hot



- 1
- 2
- 3
- 4
- 5
- 6
- 7
- 8
- 9
- 10
- 11
- 12
- 13
- 14
- 15
- 16
- 17
- 18
- 19
- 20
- 21
- 22

Next



16

Where do these plants grow best?

A somewhere sunny and dry



B in water



C in the rainforest



- 1
- 2
- 3
- 4
- 5
- 6
- 7
- 8
- 9
- 10
- 11
- 12
- 13
- 14
- 15
- 16
- 17
- 18
- 19
- 20
- 21
- 22

Next



REGENT STUDIES

Focused education on life's walk

www.regentstudies.com

17

Which of these plants that we can eat is a bulb?

A peas



B coconut



C onion



- 1
- 2
- 3
- 4
- 5
- 6
- 7
- 8
- 9
- 10
- 11
- 12
- 13
- 14
- 15
- 16
- 17
- 18
- 19
- 20
- 21
- 22

Next



18

Which of these plants that we can eat is a seed?

A garlic



B peas



C leek



- 1
- 2
- 3
- 4
- 5
- 6
- 7
- 8
- 9
- 10
- 11
- 12
- 13
- 14
- 15
- 16
- 17
- 18
- 19
- 20
- 21
- 22

Next



19

Which part of the plant do these foods come from?

A root



B leaf



C stem



parsnip

carrots

beetroot

- 1
- 2
- 3
- 4
- 5
- 6
- 7
- 8
- 9
- 10
- 11
- 12
- 13
- 14
- 15
- 16
- 17
- 18
- 19
- 20
- 21
- 22

Next



20

Which part of the plant do these foods come from?

A root



B stem



C flower



leek

celery

rhubarb

- 1
- 2
- 3
- 4
- 5
- 6
- 7
- 8
- 9
- 10
- 11
- 12
- 13
- 14
- 15
- 16
- 17
- 18
- 19
- 20
- 21
- 22

Next



21

Which part of the plant do these foods come from?

A leaf



B stem



C root



brussel sprouts

cabbage

lettuce

- 1
- 2
- 3
- 4
- 5
- 6
- 7
- 8
- 9
- 10
- 11
- 12
- 13
- 14
- 15
- 16
- 17
- 18
- 19
- 20
- 21
- 22

Next



22

Which part of the plant do these foods come from?

A stem



B leaf



C flower



broccoli

cauliflower

- 1
- 2
- 3
- 4
- 5
- 6
- 7
- 8
- 9
- 10
- 11
- 12
- 13
- 14
- 15
- 16
- 17
- 18
- 19
- 20
- 21
- 22

Finish



REGENT STUDIES

Focused education on life's walk

www.regentstudies.com

A celebratory graphic featuring a white banner with the text "Well Done!" centered on a white background. The banner is surrounded by stylized fireworks in green and red, with small stars scattered around. The entire graphic is set against a light green background with a white border.

Well Done!



REGENT STUDIES

Focused education on life's walk

www.regentstudies.com



REGENT STUDIES

Focused education on life's walk

www.regentstudies.com